

General Maths Quiz




What is 13^2 ?

ANSWER: 690

Arrange 4,6,1 + 9 to make the closest number to 5000.



ANSWER: 4961



What is 23×30 ?

ANSWER: 690

If Jane went to the shop and bought 2 loaves of white bread with a £10 note. How much change will she get?

£1.24

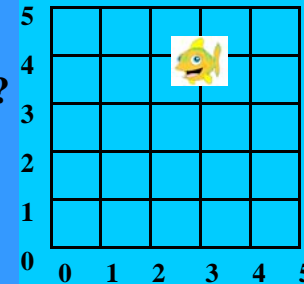


ANSWER: £7.52



What is 20^3 ?

ANSWER: 8000



What are the coordinates of the fish?

ANSWER: (3,4)

Jane went to a theme park. She went on ride A, B and C and buys a drink of water.


Ride A	50p
Ride B	£1.23
Ride C	78p
Entrance fee	£3.00

How much does she spend?

Cola	£1.58
Water	£99p

ANSWER: £3.50


Round 749.937 to the nearest hundred.



Up or down?

ANSWER: 700

How many lines of symmetry does this shape have?



ANSWER: 10